




Name: _____

Math Buzz



About how long is a bicycle?

5 inches

5 feet

Add.

$$\begin{array}{r} 54 \\ 36 \\ 90 \\ + 29 \\ \hline \end{array}$$

$$\begin{array}{r} 25 \\ 67 \\ 10 \\ + 44 \\ \hline \end{array}$$

$62 + 48 + 81 =$ _____

Moira has 2 quarters, 1 dime, 3 nickels, and 6 pennies. How much money does she have?

Show your work




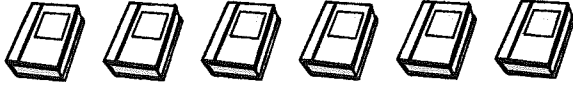
answer: _____ ¢

Count by 10s.

310, _____, 330, _____, 350

640, _____, _____, 670, 680

860, 870, _____, _____, 900


Books Read Over the Summer	
Kamari	
Daxton	
Elyse	
Zara	

Who read the most books?

answer: _____

Who read the fewest books?

answer: _____

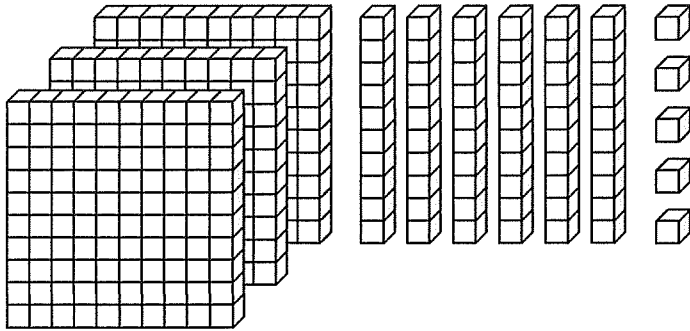
Each  = 1 book

Name: _____



Math Buzz

Count the blocks.



What number is shown?


Hundreds	Tens	Ones

958

Subtract 10

Subtract 100

About how long is a real school bus?



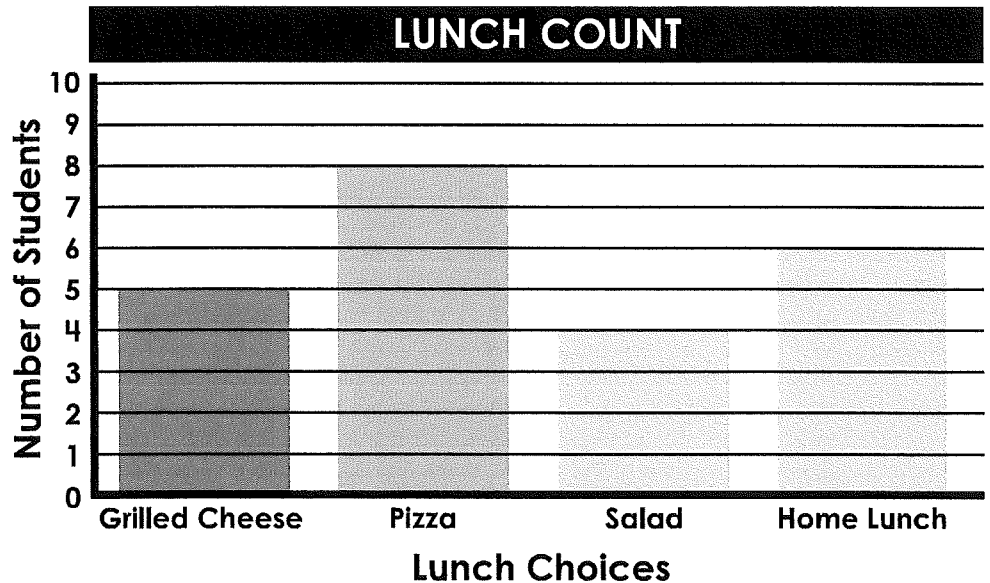
12 centimeters

12 meters

Gino had 89¢. He used one quarter to buy a gumball. How much money does Gino have left?

Show your work

answer: _____ ¢



Which lunch choice has the most? _____

Which lunch choice has the least? _____

Name: _____



Math Buzz

Draw a line that is 6 inches long and label the line A.

Draw a line that is 4 inches long and label the line B.

How much shorter is Line B than Line A?

answer: _____ inches

Add.

$$\begin{array}{r} 27 \\ 28 \\ 11 \\ + 24 \\ \hline \end{array}$$

Count back by 10s from 790 to 700.

_____, _____, _____, _____, _____,
 _____, _____, _____, _____, _____


Subtract.

**Find the difference
between 27 and 8.**

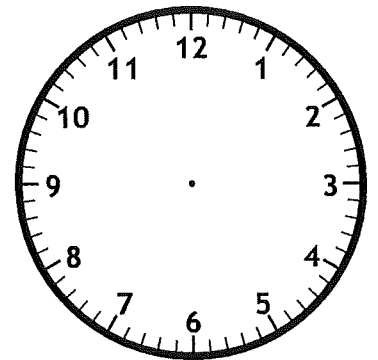
$$\begin{array}{r} \underline{\quad\quad} \\ 29 - 16 = \underline{\quad\quad} \end{array}$$

$$\begin{array}{r} 24 \\ - 8 \\ \hline \end{array}$$

Harlan began his hike at 12:30.
He finished 4 hours later.
Draw hands on the clock to show
what time Harlan finished hiking.




Start



End

Name: _____



Math Buzz

Choose the missing number.

$$25 \text{ tens} = \square$$

- a. 25 b. 250

Marshall had 80¢. He bought an eraser that costs 25¢. Draw coins to show how much change Marshall got back.

The Mehta family is taking a road trip. They drove 289 miles on Saturday, and 306 miles on Sunday. How many miles did they drive in all?

289	306
?	

answer: _____ miles

Shade in an array of 4 rows of 3 and complete the number sentence.

_____ + _____ + _____ + _____ = _____

Subtract.

	Hundreds	Tens	Ones
	5	0	0
-		6	2
<hr/>			

Name: _____



Math Buzz

Order the numbers from **greatest to least** in standard form.

600 + 90

three hundred ninety-two

5 hundreds 6 tens 6 ones

Choose the missing number.

1 meter = centimeters

a. 100 b. 10

Aimee bought a pack of gum for 72¢. She paid with a \$1 bill. Draw coins to show how much change Aimee got back.

Fill in the missing number.

76 + = 84

The students in Mr. Liu's class want to graph their eye colors. Use the tally chart to complete the picture graph, then answer the questions.

Eye Color	Number of Students
Green	
Blue	
Brown	HHH
Hazel	


Eye Color of Students	
Green	
Blue	
Brown	
Hazel	

Each  = 1 student

How many students graphed their eye colors in all? _____


How many more students have brown eyes than all the other eye colors combined? _____

Name: _____



Math Buzz

Find the total value of the money shown.




answer: _____

There are 24 students in Mr. Garcia's class, 26 students in Ms. Weir's class, 25 students in Mrs. Hart's class and 24 students in Mr. Hornsby's class. How many students are in all four classes combined?

answer: _____ students

Shade in an array of 2 rows of 5 and complete the number sentence.



2 rows of 5

_____ + _____ = _____

Subtract.

	Hundreds	Tens	Ones
	8	0	0
-	3	5	6
<hr/>			

Choose the missing number.

28 tens =

a. 280

b. 28



Name: _____

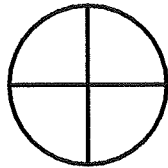
Math Buzz

Measure your pencil to the nearest inch and the nearest centimeter.

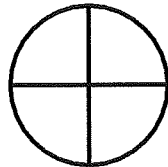
Length in inches: _____

Length in centimeters: _____

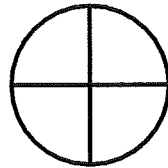
Shade 1 quarter.



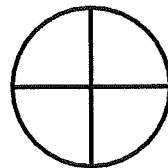
Shade 2 quarters.



Shade 3 quarters.



Shade 4 quarters.



Circle the shape that shows 1 whole shaded.

Last week the Royal Oak Recycling Center recycled 689 pounds of paper. This week, they recycled 871 pounds. How many more pounds of paper did they recycle this week?

871	
689	?

answer: _____ pounds

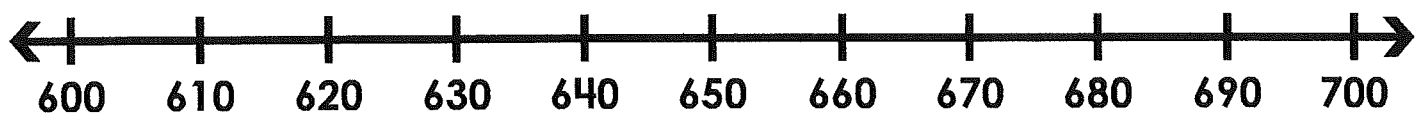
Subtract.

Subtract 18 from 23.

$$\begin{array}{r} 24 \\ - 19 \\ \hline \end{array}$$

$$\underline{\hspace{2cm}} = 15 - 7$$

Mark 690 on the number line.



Circle the number 690 is closer to. **600** **700**

Name: _____



Math Buzz

Complete the table.

In	15	9	23
Out	22		

Rule: Add 7

Subtract.

$$\begin{array}{r} 92 \\ - 58 \\ \hline \end{array}$$

$$\begin{array}{r} 29 \\ - 7 \\ \hline \end{array}$$

Count back by ones.

803, 802, _____, _____, _____, _____, _____, _____, 796

Draw coins to make \$1.00 using **only dimes and nickels**.

\$1.00

The Langmore family drove 57 miles to get to Fun World Amusement Park. Then they drove 16 miles to get to their hotel. How many miles did they drive in all?

Show your work

answer: _____ miles



Name: _____

Math Buzz

Complete the table.

In	Out
19	
12	4
30	

Rule: Subtract 8

Write each number in expanded form.

206 _____

63 _____

142 _____

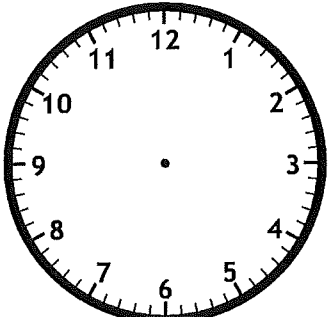
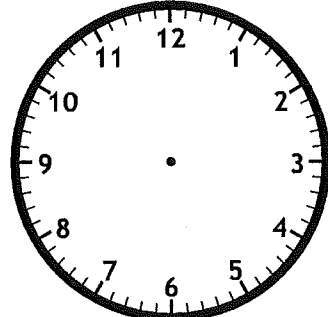
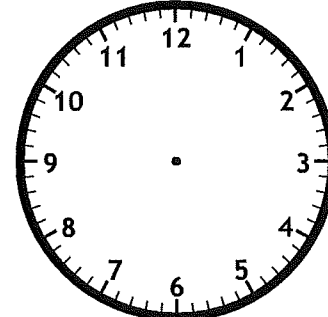
Which is the best estimate for the length of a pencil?

7 feet

7 inches

Draw hands on each clock to show what time Ms. Patty's dance classes start.

Ms. Patty's School of Dance


Ballet	Tap	Hip Hop
3:05	4:35	5:50
		

Add.

$$\begin{array}{r} 24 \\ + 10 \\ \hline \end{array}$$

$$\begin{array}{r} 76 \\ + 8 \\ \hline \end{array}$$

$$\begin{array}{r} 64 \\ + 23 \\ \hline \end{array}$$



Name: _____

Math Buzz



Find the total value of the money shown.



answer: _____

Subtract.

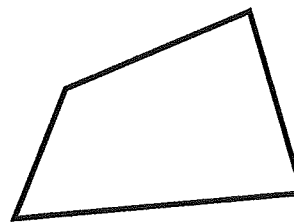
$$92 - 9 = \underline{\quad}$$

$$\underline{\quad} = 63 - 11$$

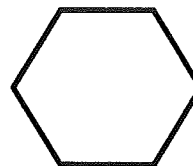
Circle the angles in each shape. Write how many.



angles: _____

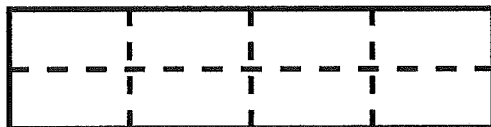


angles: _____



angles: _____

Casey built a garden bed in her backyard. She separated the garden into 4 columns and 2 rows. How many sections did Casey make in her garden?



answer: _____ sections

Fill in the value of the underlined digits.

78 _____

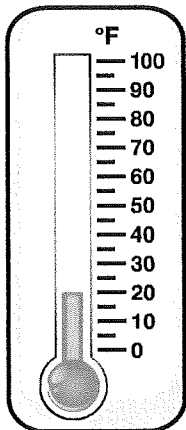

653 _____

Name: _____




Math Buzz

Choose the temperature that best matches the picture.



20°F



80°F

Belen had a box of 175 programs to pass out opening night of the play. She passed out 10 right away. How many programs does she have left to pass out?

answer: _____ programs

Add.

$$41 + 5 = \underline{\hspace{2cm}}$$

$$\underline{\hspace{2cm}} = 59 + 32$$

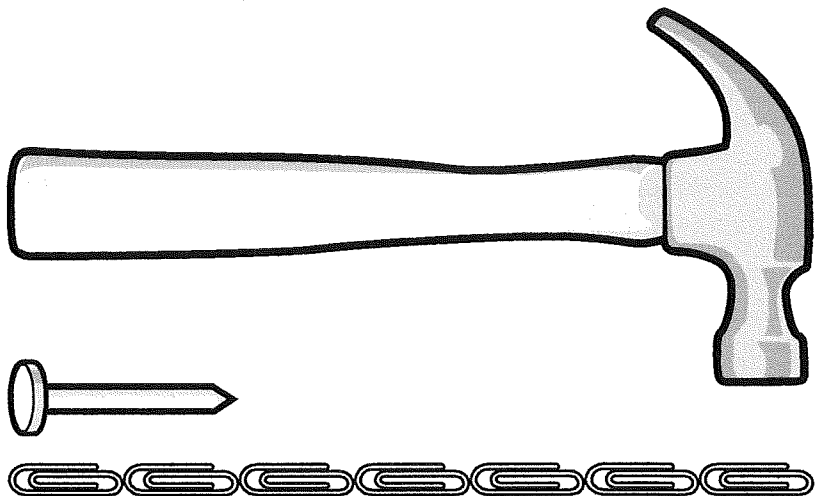
$$13 + 40 = \underline{\hspace{2cm}}$$

Write each number in word form.

89 _____


977 _____

How many paperclips longer is the hammer than the nail?






answer: _____ paperclips

Name: _____



Math Buzz

Draw lines to divide each shape into halves. Shade one half of each shape.



Principal Todoro ordered school spirit shirts. They came in two boxes. One box had 240 youth shirts. The other box had 100 adult shirts. How many shirts did she order in all?

answer: _____ shirts

Solve.

Find the difference between 96 and 17. _____

Subtract 7 from 69. _____

Compare. Write $>$, $<$, $=$.

860 _____ **680**

Ebelin and her friends were playing in the snow. The picture graph shows how many snowballs she and her friends made.

Snowballs Made	
Ebelin	○ ○ ○ ○ ○
Darrel	○ ○ ○ ○
Hector	○ ○ ○ ○ ○ ○ ○
Bianca	○ ○ ○ ○ ○

Who made the least amount of snowballs?

Which two friends made the same number of snowballs?

How many snowballs did they make in all?

Each ○ = 1 snowball